

Name _____

Telling Time Test

10

What time does the clock say?



1. _____




2. _____




3. _____


Draw the hands on the analog clock to match the digital time?



6:00




1:00



8:30

Use the words o'clock and half past to tell the time.





9. If it was 5:00 p.m., what is something you would be doing?

10. If it was 5:00 a.m., what is something you would be doing?
